



SPRINGDALES
• Our Best Always •




Summer



Holiday Homework


2024 - 25



SPRINGDALES SCHOOL
SUMMER HOLIDAYS HOMEWORK
SESSION: 2024– 25
CLASS: 5TH

SUBJECT	TOPIC
ENGLISH	<p>Q1. Write a paragraph on A4 Size sheet describing beauty and tourist places of your state. (Jammu) Paste its pictures also. (R.no1-11)</p> <p>Write a paragraph describing about heritage sites of Jammu on A4 size sheet. Paste its pictures also. (R.NO- 12-21)</p> <p>Write a paragraph describing about cuisine of Gujrat on A4 size sheet. Paste its pictures also. (R.no(22-32)</p> <p>Q2. Mixed worksheet of grammar.(Punctuation, Comprehension and grammar)</p>
HINDI	<p>प्र०1. अपनी हिंदी की पाठ्यपुस्तक के पाठ - 4 और पाठ- 5 का पठन करें तथा उसका सार अपने शब्दों में A4 साइज़ शीट पर लिखें।(शब्द सीमा 50-60 शब्द)</p> <p>प्र०2. (क) गुजरात के राजकीय प्रतीक चिह्नों के चित्र ए4 साइज़ शीट पर चिपकाए तथा उनके बारे में लिखकर एक परियोजना तैयार करें। (अनुक्रमांक:1-16)</p> <p style="padding-left: 40px;">(ख) भारत के राजकीय प्रतीक चिह्नों के चित्र ए4 चार्ट पर चिपकाए तथा उनके बारे में लिखकर एक परियोजना तैयार करें। (अनुक्रमांक:17-32)</p> <p>प्र०3. व्याकरण से संबंधित अभ्यास पत्रिका करें।</p>
MATH	<p>Q1. Write down the population of Gujarat and J&K in 2011 and 2024. Find the increase in the population .(R.no 1-16)</p> <p>Find out the height of some famous monuments of Gujarat and J&k .Add their heights and get the total. Write the total as per Indian place value chart.(R.no 17-32)</p> <p>Q2. Make a TLM on Roman numerals (R.no 1-12)</p> <p>Make a clock using Roman numerals (R.no 13-24)</p> <p>Make a chart on Roman numerals (R.no 25-32)</p>
EVS	<p>Q1. Paste famous sports person of Gujarat and write few lines on them .</p> <p style="padding-left: 40px;">Cricket (R.no 1-16) Football (R.no 17-32)</p> <p>Q2. Draw a model on respiratory system. (R.no 1-16)</p> <p>Do the activity (model) on your EVS book mentioned on Pg 27 (How Diaphragm help in breathing) (R.no 17-32)</p>
COMPUTER	<p>Prepare a chart on the topic: "Different Power Saving Mode"on A4 size sheet and write few lines on it.</p> <p>Note: Take the help from the Internet to collect the information</p>

Teacher Incharge: Preeti Verma

	SPRINGDALES SCHOOL SUMMER HOLIDAY WORKSHEET (2024-2025)			
	Name:	Class: 5th	Date:-	Subject: English
	Roll no:-	Topic: Pronouns	Ch:	Time:

Q1. Encircle the pronoun and write its type in the provided.

1. We must do our work ourselves _____
2. This is my favourite shirt _____
3. I met a friend of mine _____

Q2. Complete the following sentences using reflexing or personal pronouns.

1. This day I hurt _____ with a car.
2. I met _____ sister yesterday.
3. Birds built _____ nests in trees.

Q3. Fill in the blanks with suitable possessive pronoun.

1. This is her room. This room is _____
2. That is their class. That class is _____
3. They are the owner of the field. The field belongs to _____

Q4. Insert suitable Pronouns :-

1. _____ does his work carefully.
2. _____ still live in our old house.
3. Sita is absent, because _____ is ill.
4. Is _____ your sister or your cousin.
5. Do not answer unless _____ know.

Q5. Write Pronouns in agreement with their nouns in the following sentences:

1. Sita's brother gave _____ a pearl necklace.
2. I have five flowers; _____ are all pink.
3. I looked for the book, but could not find _____

Q6. Use the reflexive Pronouns in the word box to complete the sentences.

Myself Yourself Herself Himself Itself Ourselves Yourselves
Themselves

1. I wondered about that _____
2. Adam hurt _____ playing hockey.
3. You and I have to ask _____ that question.
4. George and Mary did the Project all by _____
5. Make sure you clean _____ up before the party starts.

Q7. Complete the sentence with correct pronoun.

1. Ben always wanted his children to look after _____ and do what they wanted.
a) Themselves b) ourselves c) herself.
2. Once there was a young girl who called _____ princess.
a) Myself b) himself c) herself
3. May shocked her father with an idea that she was going to try out on _____
a) Himself b) themselves c) herself.

Q8. Punctuate the following sentences:

1. how beautiful the sky is

2. will you help me

3. yes i can meet you tomorrow if the weather is fine

4. to err is human to forgive divine

5. pardon me o god


6. he didn't think I noticed him

7. I can't describe him anymore

8. high voltage Do not touch it

9. how beautiful this city is

10. before your friends come clean your room

 SPRINGDALES <small>• Our Best Always •</small>	स्प्रिंगडेल्ज़ स्कूल अभ्यास पत्रिका (2024-2025)		
	नाम :	कक्षा : पाँचवी	विषय : हिंदी

प्र०1. निम्नलिखित गद्यांश को पढ़कर प्रश्नों के उत्तर लिखें :-

मनुष्य को सदा मुसकराते और हँसते रहना चाहिए। हँसने मुसकराने से तनाव दूर होता है। दिमागी संतुलन बना रहता है। अस्थिर दिमाग को शांति मिलती है और मन में सकारात्मक विचार आते हैं। खिलखिला कर हँसना पूरे शरीर के लिए अच्छा व्यायाम है। इससे शरीर की मांसपेशियाँ खुल जाती हैं। फेफड़े ऑक्सीजन से भर जाते हैं और खून का प्रवाह भी बढ़ जाता है। शरीर के भीतर नई ऊर्जा का संचार होने लगता है। उदासी जो दिमाग की बीमारी है, हँसने से उरकर भाग जाती है। इस तरह हँसना तन तथा मन दोनों के लिए फ़ायदेमंद है। तभी तो सुबह सवेरे पार्कों में हज़ारों लोग छोटेछोटे घेरे बनाकर हाहा करते हँसते नज़र आते हैं। आजकल हँसने को चिकित्सा के तौर पर भी इस्तेमाल किया जाता है। धरती पर मनुष्य ही एक ऐसा प्राणी है जो मुसकरा और हँस सकता है, तो फिर क्यों न कुदरत की इस नियामत का मज़ा लें। आओ, हँसे और हँसाएँ ।

प्र०1. हँसने मुसकराने से क्या होता है?

ऊ०

प्र०2. खिलखिलाकर हँसना किस तरह एक अच्छा व्यायाम है?

ऊ०

प्र०3. सुबह सवेरे हज़ारों लोग पार्कों में क्या करते नज़र आते हैं ?

ऊ०

प्र०4. मनुष्य ऐसा क्या कर सकता है, जो बाकी प्राणी नहीं कर सकते?

ऊ०

प्र०5. इस गद्यांश का उचित शीर्षक लिखिए।

ऊ०

प्र०2. नीचे दिए गए शब्दों के अर्थ लिखकर वाक्य निर्माण करें -

(क) रणक्षेत्र -

(ख) सम्मुख -

(ग) मस्तिष्क -

(घ) इच्छुक -

(ङ) अद्भुत -

प्र०3. दिए गए शब्दों के अंतिम वर्ण से नए शब्द बनते हुए शब्द सीढ़ी पूरी करें -

(क) फल - _____

(ख) देखना - _____

प्र०4. नीचे दिए गए चित्र का वर्णन अपने शब्दों में लिखें :- (शब्द सीमा 30-40 शब्द)



ऊ०

—

—

—

—

—

—

प्र०5. 'एक गाँव का मेला' विषय पर सचित्र अनुच्छेद लिखें -(शब्द सीमा 40-50 शब्द)

ऊ०.



SPRINGDALES SCHOOL
WORKSHEET (2024-2025)

Name: _____ Class: 5th Rollno. : _____ Subject : Maths

Q1. Do as directed:

- a) 23,219 more than 8,25, 499
- b) Subtract 4,79,878 from 7,85,700
- c) $56,798 \times 305$
- d) $4426125 \div 275$

Q2. Write the total number of pages of the books mentioned below and then apply BODMAS

(No.of Pages of English + No.of pages of EVS) \times No. of Pages of Maths - No.of Pages of Hindi

Q3. Mohit and Rahul both answered the question paper given below. Their answer sheet are shown here. Check their answer sheet and find out who performed better.

Express the following statements into numeric form.

- a) Take away 1506298 from 3284162
- b) Find the difference of 4900286 and 3618978
- c) By how much is 1658215 greater than 970596
- d) How much is 500723 less than 3077189
- e) 9271524 is decreased by 1500216
- f) Deduct 215073 from 496008

Question paper

Put a tick (✓) for correct answers and a cross (x) against the wrong answers.

Answer sheet

	Mohit	Answer sheet
1	3284162 - 1506298	<input checked="" type="checkbox"/>
2	4900286 - 3618978	<input type="checkbox"/>
3	970596 - 1658215	<input type="checkbox"/>
4	500723 - 3077189	<input type="checkbox"/>
5	9271524 - 1500216	<input type="checkbox"/>
6	215073 - 496008	<input type="checkbox"/>

Rahul

	Rahul	Answer sheet
1	1506298 - 3284162	<input checked="" type="checkbox"/>
2	4900286 - 3618978	<input type="checkbox"/>
3	1658215 - 970596	<input type="checkbox"/>
4	3077189 - 500723	<input type="checkbox"/>
5	1500216 - 9271524	<input type="checkbox"/>
6	496008 - 215073	<input type="checkbox"/>

Mohit's score = _____
Rahul's score = _____
Who gave more correct answers ? _____



SPRINGDALES
• Our Best Always •

SPRINGDALES SCHOOL

WORKSHEET (2024-2025)

Name:

Class:5th

Rollno. :

Subject : EVS

Q1. Choose the correct answer:

1. Which sense allows animals to detect and interpret chemicals in their environment?

- a) Sight b) Smell c) Taste d) Touch

2. What is the sense that allows animals to perceive and interpret sounds in their environment?

- a) Hearing b) Sight c) Taste d) Touch






3. I have an extra ordinary smell. Who I am?

- a) dog b) cat c) snake d) none of these

Q2. Fill in the blanks:

1. Animals with six legs are known as _____ .
2. Butterflies suck the nectar of flowers through _____.
3. _____ have long whiskers to detect things around.
4. Animals like rat , bat and owl are examples of _____ animals.

Q3.Complete the given table:

Animal	Super sense (Sight/Smell/Hearing)
	
	
	
	
	

Q4.

Observe the picture and answer the following questions.



(i) What is the name of the animal seen in the picture?

(ii) How does this animal warn other animals of its area about the danger?

Q5. Answer the following questions:

(i) Who are scavengers? Give example.

Ans :

(ii) Why lizards are not seen in winters?

Ans :
